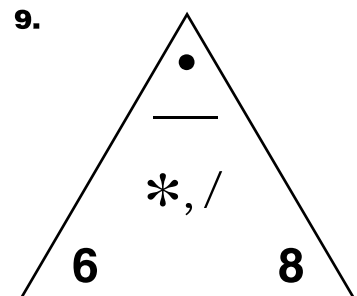
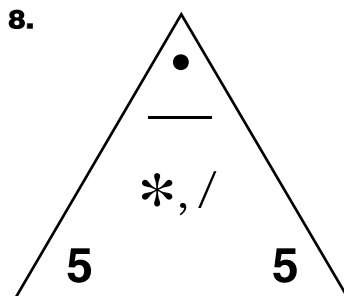
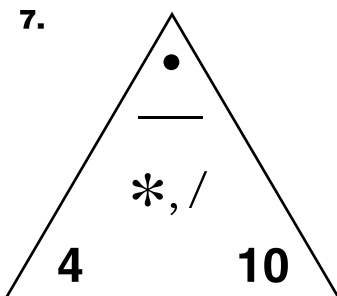
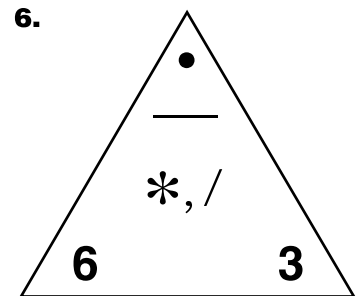
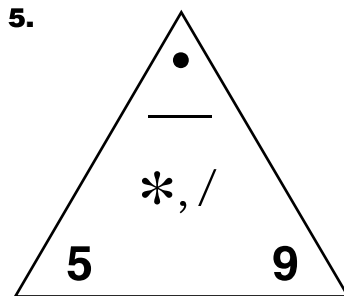
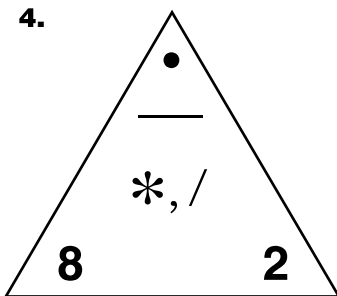
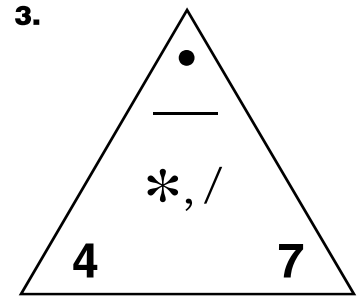
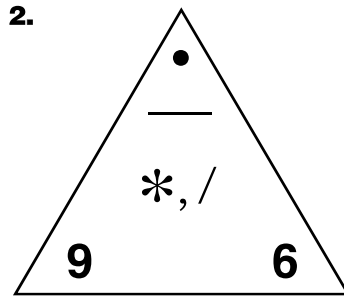
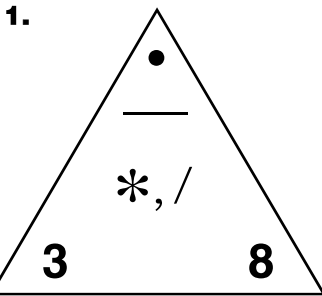


**STUDY LINK**  
**3•3**

# Fact Triangles



Complete these Multiplication/Division Fact Triangles.



## Practice

10. Name 4 multiples of 7. \_\_\_\_\_, \_\_\_\_\_, \_\_\_\_\_, \_\_\_\_\_

11. List all the factors of 18. \_\_\_\_\_

12. Name the product of 9 and 6. \_\_\_\_\_

13. List all the factor pairs of 20.

\_\_\_\_\_ and \_\_\_\_\_, \_\_\_\_\_ and \_\_\_\_\_, \_\_\_\_\_ and \_\_\_\_\_