

Name: _____

Date: ____/____/____

Unit 3 Review Packet

[1] 2 inches

[2] 1 inch

[3] $\frac{1}{4}$ inch

[4] Length of side: 4 cm; Perimeter: 12 cm

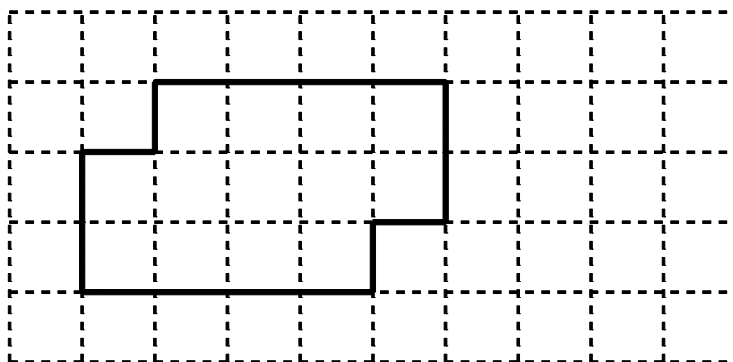
[5] Third side: 2 cm; Perimeter: 10 cm

[6] Remaining side: 4 cm; Perimeter: 14 cm

[7] 8 square cm

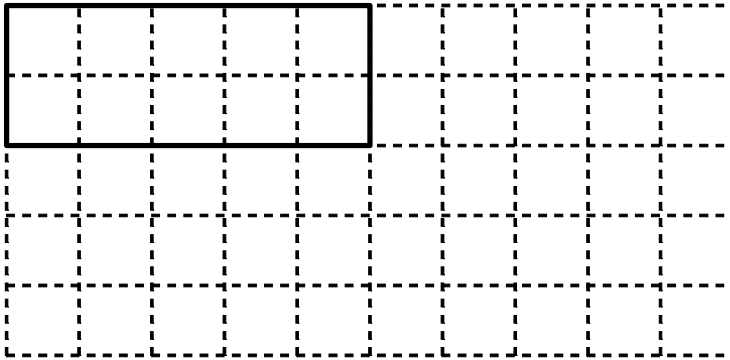
[8] 36 square cm

Sample answer:



[9] _____

Sample answer:



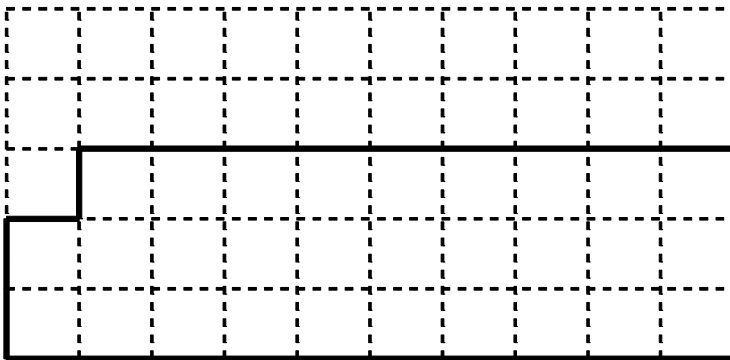
[10] _____

[11] Length of side: 5 cm; Perimeter: 12 cm

[12] Third side: 5 cm; Perimeter: 12 cm

[13] Remaining side: 4 cm; Perimeter: 14 cm

Sample answer:

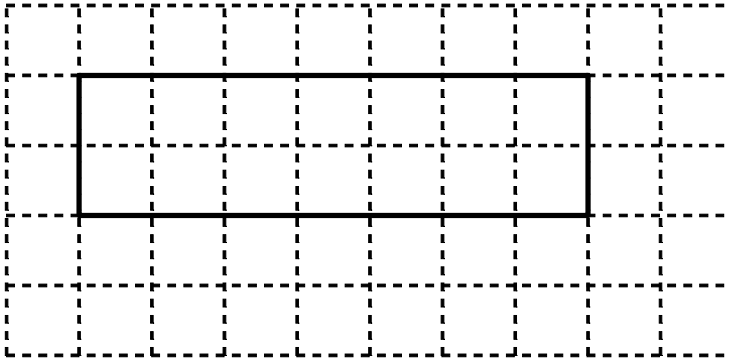


[14] _____

[15] 6 square cm

[16] 35 square cm

Sample answer:



[17] _____

[18] 1 inch

[19] 3 inches

[20] 2 inches

[21] Length of side: 1 cm; Perimeter: 8 cm

[22] Third side: 3 cm; Perimeter: 10 cm

[23] Remaining side: 4 cm; Perimeter: 15 cm