

Name: _____

Date: ____/____/____

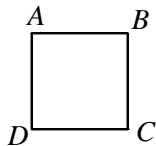
Chapter 1 Review - Answer Key

- a. pentagon
 - b. triangle
 - [1] c. parallelogram
-

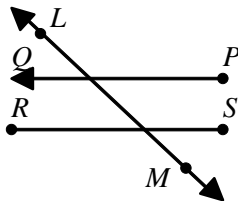
- a. A, D
 - [2] b. Sample answer: A has curved sides.
-

a. square

b. and c.



- [3] d. $ABCD$, $BCDA$, $CDAB$, and $DABC$
-



- [4] _____

● \overleftrightarrow{CE}

○ \overline{CE}

● \overrightarrow{EC}

- [5] _____

● \overleftrightarrow{XZ}

○ \overline{XZ}

○ \overleftarrow{ZX}

- [6] _____





- parallelogram
- trapezoid
- quadrangle

[7]

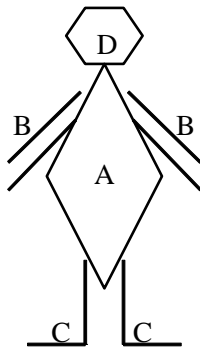
- trapezoid
- rhombus
- pentagon

[8]

a.

Label	Geometric Figure	Sketch
A	rhombus	
B	parallel line segments	
C	right angle	
D	hexagon	

b. Sample answer:



[9]
