

Name: _____

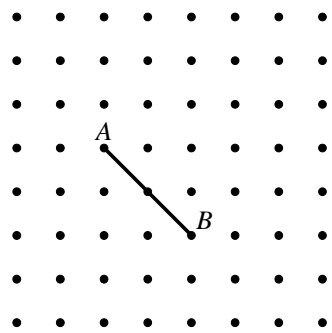
Unit 9 Review

[1] 3 inches _____

[2] about 13 cm _____

[3] Area = 6 sq cm _____

[4] Area = 9 sq cm _____

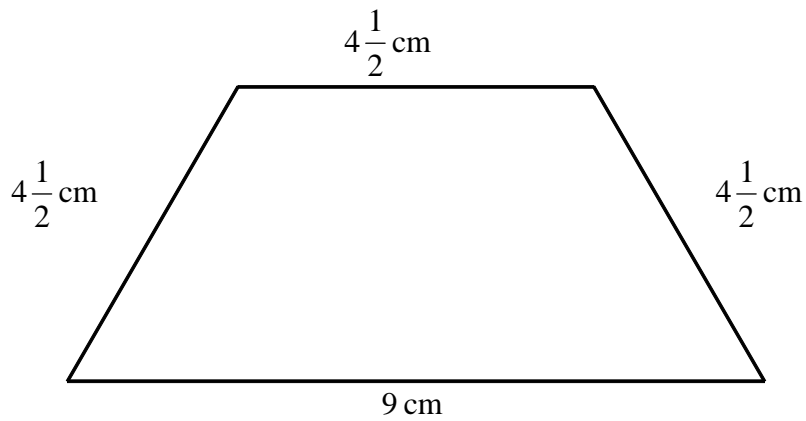


[5] _____

[6] $80 + 30 = 110$ _____

[7] 8 inches _____

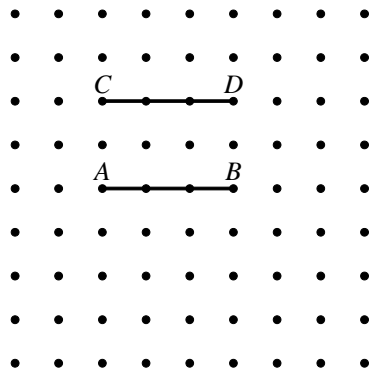
[8] 8 inches _____



[9] _____

[10] Answers may vary. Sample answer: $\frac{2}{4}$

Sample Answer:



[11] _____

[12] 69

[13] 100

[14] 20

[15] 27
