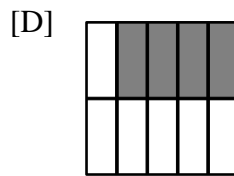
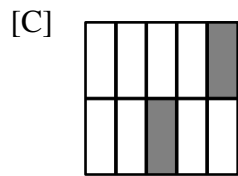
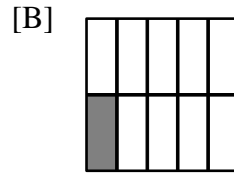
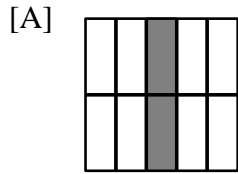


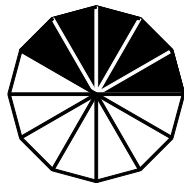
Name: _____

Unit 8 Review

1. Which shows $\frac{1}{10}$ shaded?



2. Which fraction shows the shaded part?



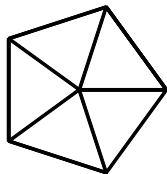
[A] $\frac{5}{13}$

[B] $\frac{4}{12}$


[C] $\frac{5}{12}$

[D] $\frac{4}{13}$

3. Color $\frac{4}{5}$.

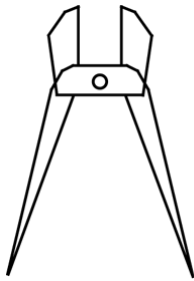


4. Color $\frac{1}{5}$ of the group of shirts.



-
5. Name one thing that you are sure will happen today.
-

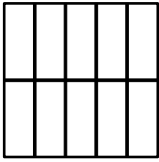
6. Which picture has a line of symmetry?



P

6

7. Color one-tenth.



8. a. Divide into:

Halves



Fourths



Write $<$, $>$, or $=$.

b. $\frac{1}{2}$ _____ $\frac{1}{4}$

c. $\frac{2}{4}$ _____ $\frac{1}{2}$

9. a. Three people share 6 pennies equally.

How many pennies does each person get? _____
pennies

b. $\frac{2}{3}$ of the pennies equals: _____ pennies

10. Use counters to solve.

There are 12 cookies in the cookie jar.

$\frac{1}{3}$ of them are peanut butter.

How many are peanut butter?