

Name: _____

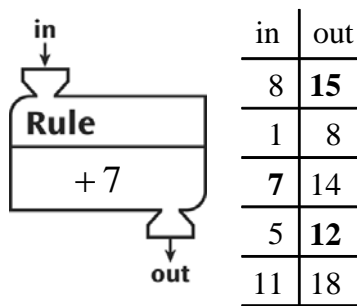
Unit 6 Review

[1] 8:15 _____

Total	
Part	Part
23	9

Answer: 32 birds

[2] Number model: $23 + 9 = 32$ birds _____




[3] _____

[4] > _____


- a. 3
- b. 5
- c. 1
- d. 7

[5] e. 1,357 _____

[6] 60; $20 + 40 = 60$ _____



21
[7] $7 \times 3 = 21$



[8] 16 cookies more



[9] 5 cookies more

[10] 20
