

Name: \_\_\_\_\_

Unit 1 Review

---

1. Show 12 with tally marks.

---

2. Write how much in all.



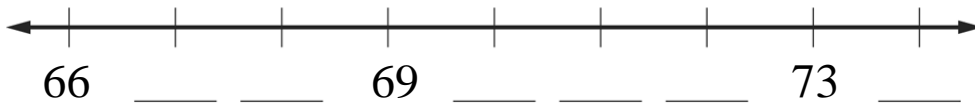
3. Write the amount.



Total: \_\_\_\_\_


---

4. Fill in the missing numbers.



5. Write three different names for 26.

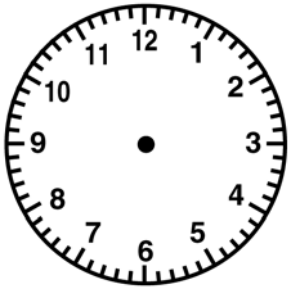
6. Write the time shown on the clock.



\_\_\_\_\_ : \_\_\_\_\_

---

7. Draw the hour hand and the minute hand to show the time.



8:30

---

8. Fill in the missing numbers.

89	

9. Find the missing number.

$$\begin{array}{|c|} \hline \cdot & \cdot & \cdot \\ \cdot & \cdot & \cdot \\ \hline \cdot & \cdot & \cdot \\ \cdot & & \cdot \\ \hline \end{array} \quad \begin{array}{r} 5 \\ + 3 \\ \hline \square \end{array}$$

---

10. Find the missing number.

$$\begin{array}{|c|} \hline \cdot & \cdot & \cdot \\ \cdot & \cdot & \cdot \\ \hline \cdot & \cdot & \cdot \\ \cdot & \cdot & \cdot \\ \hline \end{array} \quad \begin{array}{r} 5 \\ + \square \\ \hline 9 \end{array}$$

---

11. Find the missing number.

$$\begin{array}{|c|} \hline \cdot & \cdot & \cdot \\ \cdot & \cdot & \cdot \\ \hline \cdot & \cdot & \cdot \\ \cdot & \cdot & \cdot \\ \hline \end{array} \quad \begin{array}{r} \square \\ + 5 \\ \hline 8 \end{array}$$

---

12. Draw coins to show 47¢ two different ways.

Use Ⓟ, Ⓝ, Ⓓ, and Ⓠ for coins.

13. Write the number that is 10 less and 10 more.

Less

More

\_\_\_\_\_ 135 \_\_\_\_\_