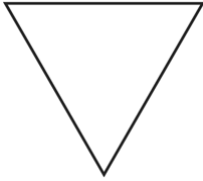


Name: _____

Unit 10 Review

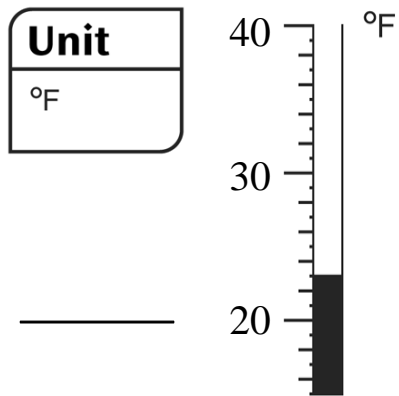
1. Find all the lines of symmetry for the shape.



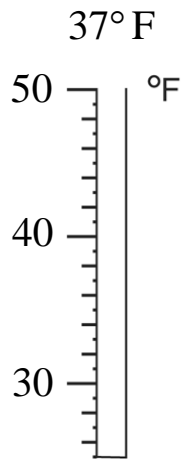
-
2. Count by 1s.

7,069, 7,070, _____, _____, _____, _____, _____, _____

3. What is the temperature?



4. Mark the thermometer to show the temperature.



5. Find the rule and complete the “What’s My Rule?” table.

Rule	in	out
	175	200
	225	250
	300	
		550

6. Use coins and bills. Write the amount.

\$1 Q D D N N N P P P P

7. Fill in the blank. Write *ones*, *tens*, *hundreds*, or *thousands*.

The 2 in 8,629 stands for 2 _____.

8. You buy:

Grapes and
1 lb for \$1.29 lb



Apples
1 lb at \$2.39 lb



- a. Estimate the total cost.
- b. Find the exact cost, with or without a calculator.

9. You buy a gallon of milk for \$2.87.
You give the cashier \$5.00.
How much change should you get? Show your work.

10. Four people share 8 pennies equally.
How many pennies does each person get? _____
pennies