

HOME LINK
5•9**Practice with Decimals****Family Note**

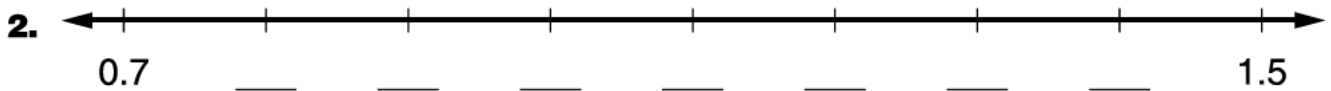
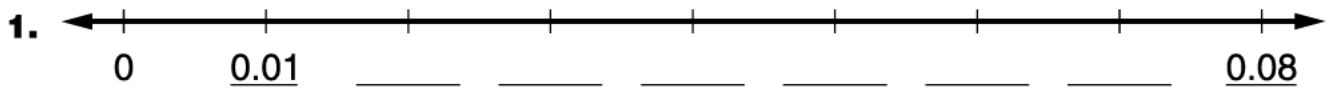
Your child has been using the metric system to practice measurements and to convert centimeters to meters. The following equivalencies will assist you in helping your child solve Problems 3–6.

Please return this Home Link to school tomorrow.

1 cm = 10 mm
1 m = 100 cm
1 m = 1,000 mm

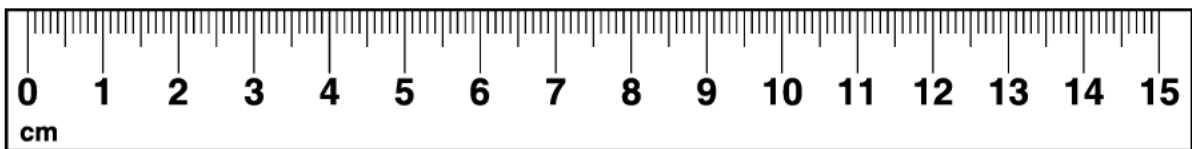


Fill in the missing numbers.



Follow these directions on the ruler below.

3. Make a dot at 7 cm and label it with the letter *A*.
4. Make a dot at 90 mm and label it with the letter *B*.
5. Make a dot at 0.13 m and label it with the letter *C*.
6. Make a dot at 0.06 m and label it with the letter *D*.

**Practice**

7. $3 \times 9 =$ _____ 8. $5 \times 8 =$ _____ 9. $0 \times 8 =$ _____
10. _____ $= 2 \times 6$ 11. _____ $= 3 \times 3$ 12. _____ $= 5 \times 3$