

## Fact Triangles

**Family Note**

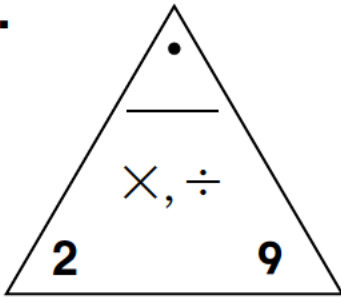
In class today, your child reviewed the calendar and continued to practice multiplication and division facts. Please spend a few minutes with your child as often as possible practicing facts. You can use Fact Triangles, or you can play a game like *Multiplication Top-It* or *Beat the Calculator*.

Please return this Home Link to school tomorrow.



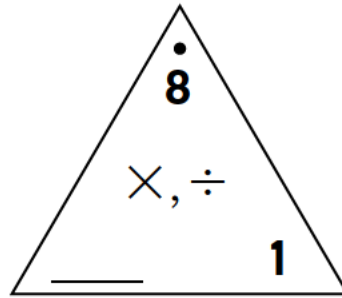
Fill in the missing number in each Fact Triangle. Then write the fact family for the triangle.

1.



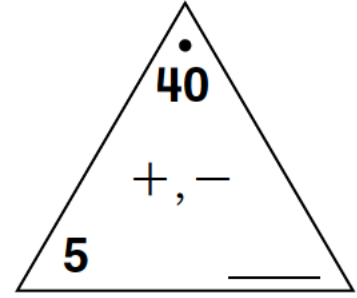
$$\begin{array}{l} \_ \times \_ = \_ \\ \_ \times \_ = \_ \\ \_ \div \_ = \_ \\ \_ \div \_ = \_ \end{array}$$

2.



$$\begin{array}{l} \_ \times \_ = \_ \\ \_ \times \_ = \_ \\ \_ \div \_ = \_ \\ \_ \div \_ = \_ \end{array}$$

3.



$$\begin{array}{l} \_ \times \_ = \_ \\ \_ \times \_ = \_ \\ \_ \div \_ = \_ \\ \_ \div \_ = \_ \end{array}$$

**Practice**

4. 
$$\begin{array}{r} 231 \\ - 47 \\ \hline \end{array}$$

5. 
$$\begin{array}{r} 85 \\ - 25 \\ \hline \end{array}$$

6. 
$$\begin{array}{r} 156 \\ + 87 \\ \hline \end{array}$$

7. 
$$\begin{array}{r} 94 \\ + 87 \\ \hline \end{array}$$